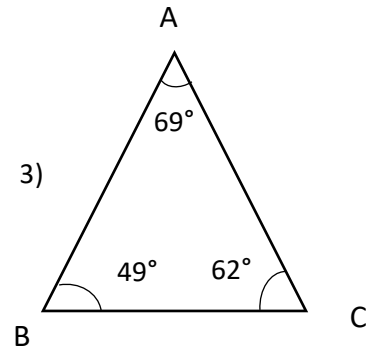
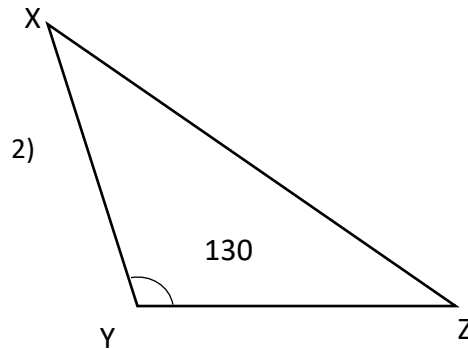
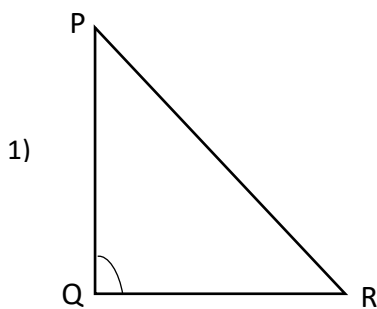




STANDARD 6TH: CHAPTER 15

Triangle & Properties

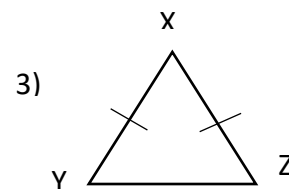
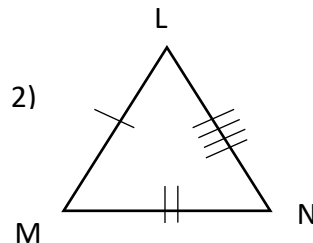
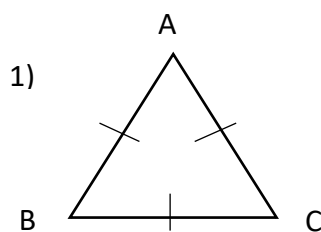
Q1. Observe figures below & write type of triangle based on its angles.



Q. The lengths of sides of some triangles are given. State type of triangles.

- 4) 3 cm, 4 cm, 5 cm -
- 5) 3.2 cm, 3.2 cm, 4 cm -
- 6) 4.5 cm, 4.5 cm, 4.5 cm -
- 7) 3.9 cm, 3.6 cm, 4.2 cm -
- 8) 7 cm, 6 cm, 13 cm -

Q2. Observe figures below & write types of triangles based on its sides.



Q3. Lengths of 3 sides are given for constructing triangle State whether triangles with these sides can be drawn.

- 1) 17 cm, 7 cm, 9 cm -
- 2) 7 cm, 24 cm, 25 cm -
- 3) 9 cm, 7 cm, 16 cm-
- 4) 8.4 cm, 16.5 cm, 5cm-
- 5) 11 cm, 60 cm, 61 cm -
- 6) 15 cm, 20 cm, 25 cm-
- 7) 10.1 cm, 10.1 cm, 20 cm-
- 8) 7 cm, 8 cm, 9 cm-
- 9) 12 cm, 35 cm, 37 cm -