






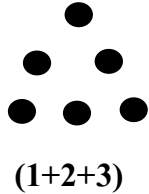



STANDARD 5TH: CHAPTER 15

Patterns



These are called ‘square numbers’. They can be distributed in equal number of rows & columns.



These are called ‘triangular numbers’ .

They are written in a specific pattern like 1 in 1st row, 2 in 2nd row, 3 in 3rd row & so on

1) Find square numbers from given list

5, 9, 12, 16, 50, 60, 64, 72, 80, 81

2) Find triangular numbers from given list

3, 6, 8, 9, 12, 15, 16, 20, 21, 42

3) Which number is square as well as triangular?

4) If 4 is 1st sq. no. Find 10th One.

5) If 3 is 1st triangular no. find 10th One.